


Damped pendulum:

We obtain the second order ODE on  $\theta$ :

$$\theta'' + \underbrace{\gamma}_{\text{fraction term}} \theta' + \omega^2 \sin \theta = 0.$$

We turn it into an equivalent system:

by  $y_1 = \theta, \quad y_2 = \theta'$

$$\vec{y}'(t) = \begin{pmatrix} y_2 \\ -\omega^2 \sin y_1 - \gamma y_2 \end{pmatrix} =: f(\vec{y}).$$

Step 1: Find all critical points

i.e.  $f(\vec{y}) = 0 \iff y_1 = k\pi, \quad y_2 = 0.$

write  $\vec{y}_k := \begin{pmatrix} k\pi \\ 0 \end{pmatrix}$

Step 2: Compute the associated linear system for each critical pt:

$$\left( \frac{\partial f}{\partial y} \right)_{ij} = \begin{pmatrix} 0 & 1 \\ -\omega^2 \cos y_1 & -\gamma \end{pmatrix}$$

- if  $k$  even  
+ if  $k$  odd

at  $y_1 = k\pi, \quad y_2 = 0 \implies \left( \frac{\partial f}{\partial y} \right) = \begin{pmatrix} 0 & 1 \\ \pm \omega^2 & -\gamma \end{pmatrix}$

Step 3: For each critical pt  $\vec{y}_*$ , compute eigenvalues of  $Df(\vec{y}_*)$ :

Let  $k = 2m\pi$ :

$$\begin{aligned} & \det(Df(\vec{y}_{2m}) - xI) \\ &= \det \begin{pmatrix} -x & 1 \\ -\omega^2 & -\gamma - x \end{pmatrix} = x(x + \gamma) + \omega^2 \\ &= x^2 + \gamma x + \omega^2 \end{aligned}$$

$$r_1 = \frac{-\gamma}{2} + \frac{1}{2}\sqrt{\gamma^2 - 4\omega^2}, \quad r_2 = \frac{-\gamma}{2} - \frac{1}{2}\sqrt{\gamma^2 - 4\omega^2}$$

Cases:

a)  $\gamma^2 > 4\omega^2$ ,  $r_1, r_2$  are distinct real negative eigenvalues  
 $\Rightarrow$  A. stable node

b)  $\gamma^2 = 4\omega^2$ , repeated negative eigenvalue  
 $\Rightarrow$  A. stable (type undetermined)

c)  $\gamma^2 < 4\omega^2$ , complex pair of eigenvalues with  $\text{Re}(r_1) = \text{Re}(r_2) < 0$   
 $\Rightarrow$  A. stable spiral

For  $k = (2m+1)\pi$ :  $Df(\vec{y}_k) = \begin{pmatrix} 0 & 1 \\ \omega^2 & -\gamma \end{pmatrix}$

$$\det(Df(\vec{y}_k) - xI) = \det \begin{pmatrix} -x & 1 \\ \omega^2 & -\gamma - x \end{pmatrix}$$

$$= x^2 + \gamma x - \omega^2$$

$$r_1 = \frac{-\gamma}{2} + \frac{\sqrt{\gamma^2 + 4\omega^2}}{2}, \quad r_2 = \frac{-\gamma}{2} - \frac{\sqrt{\gamma^2 + 4\omega^2}}{2}$$

$$r_2 < 0 < r_1$$

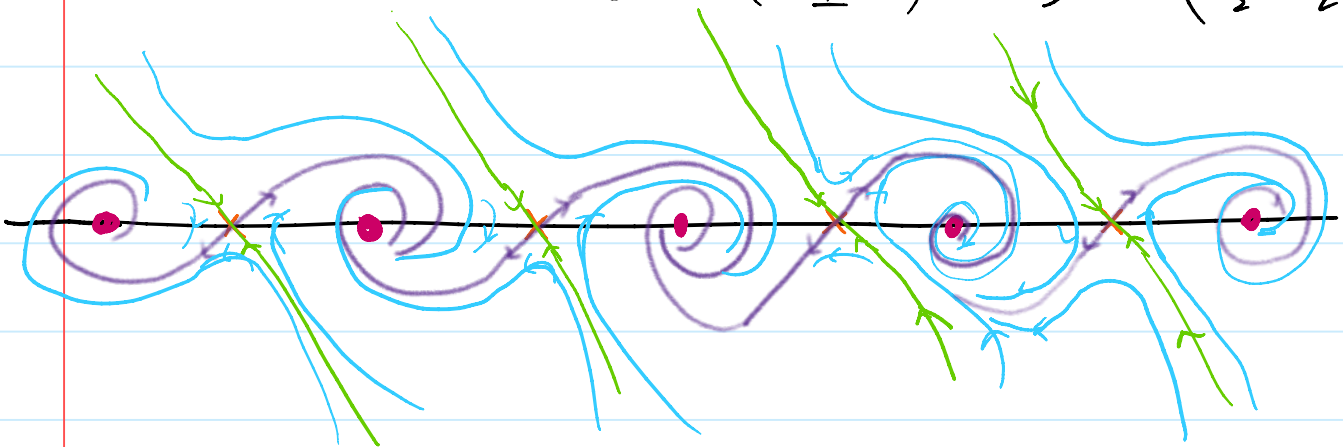
$\Rightarrow$  We have an unstable saddle.

Step 4: We will use this to draw the phase portrait.

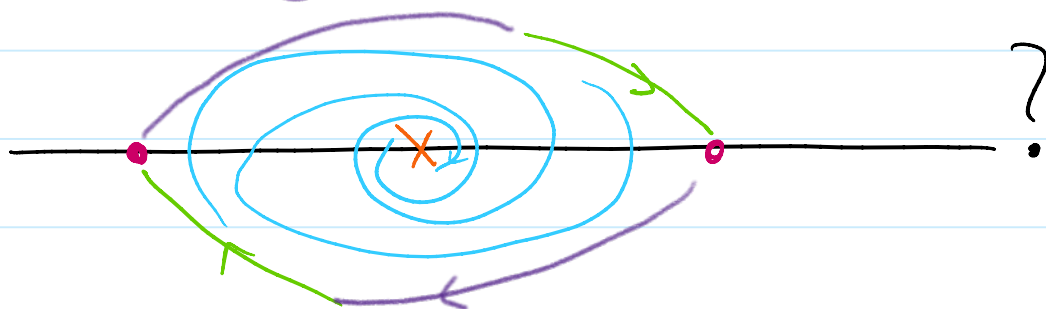
(Assume  $\gamma = \omega = 1$ )

For  $y_k$  s.t.  $k$  odd:  $r_1 = \frac{-1}{2} + \frac{\sqrt{5}}{2}, \quad r_2 = \frac{-1}{2} - \frac{\sqrt{5}}{2}$

eigenvectors:  $\vec{z}_1 = \begin{pmatrix} \frac{1}{2} + \frac{\sqrt{5}}{2} \\ 1 \end{pmatrix}, \quad \vec{z}_2 = \begin{pmatrix} -1 \\ \frac{\sqrt{5}}{2} + \frac{1}{2} \end{pmatrix}$



Question: why it cannot be



Method 1: Numerically, we can plot enough vector field to determine which is the case

Method 2: consider  $V(y_1, y_2) = 1 - \cos y_1 + \frac{1}{2} y_2^2$

total kinetic + potential energy.  
for  $\omega = 1$ .

and show that  $\frac{d}{dt}(V(\vec{y}(t))) < 0$   
if  $\gamma > 0$ .